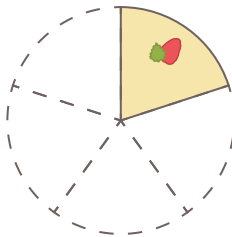
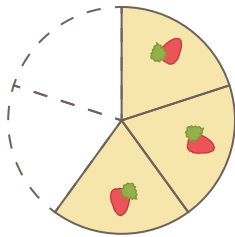




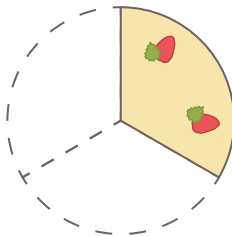
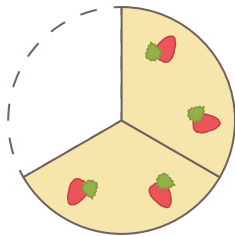
Subtracting Fractions

□ Find the difference.

$$(1) \quad \frac{3}{5} - \frac{1}{5} =$$



$$(2) \quad \frac{2}{3} - \frac{1}{3} =$$



$$(3) \quad \frac{5}{7} - \frac{2}{7} =$$

