


2 Measuring Volume



1 dL



Trace it! ↓


1 dL

1 dL

1 dL

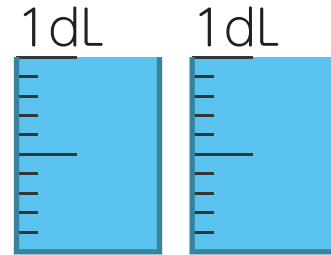
Write down how much water is in each beaker.

①



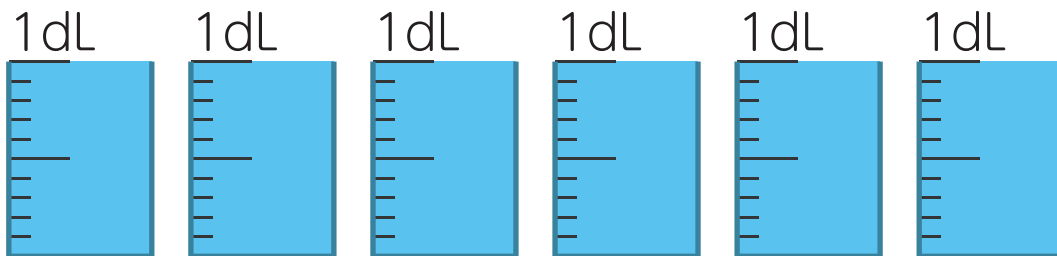
(dL)

②



(dL)

③



(dL)