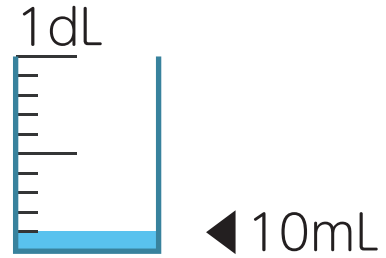


3

Measuring Volume




$$1 \text{ dL} = 100 \text{ mL}$$




Write down how much water is in each beaker.

①




(mL)

②



(mL)

③



(mL)

④



(mL)