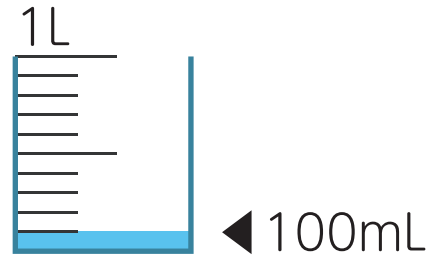


2 Measuring Volume

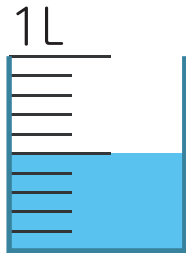


$$1 \text{ L} = 1000 \text{ mL}$$



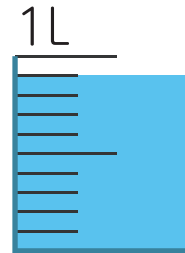
Write down how much water is in each beaker.

①



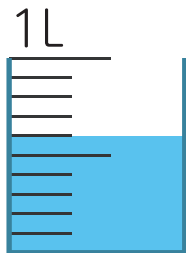
(mL)

②



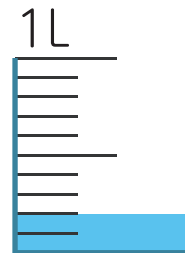
(mL)

③



(mL)

④



(mL)