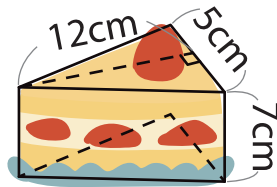


# 2 Estimating Area



You can also estimate the volume of irregular shape by finding the volume of a simple shape.



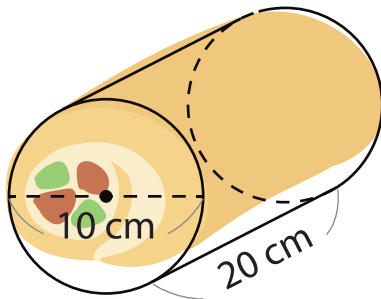
the volume of the triangular prism

$$5 \times 12 \div 2 \times 7 = 210$$

about 210 cm<sup>3</sup>

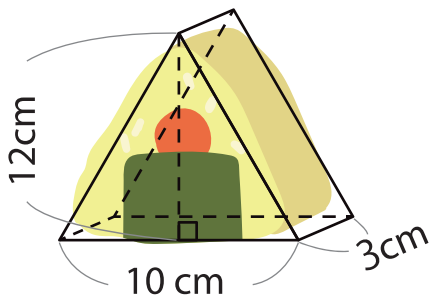
Find the approximate volume of each shape below.

1



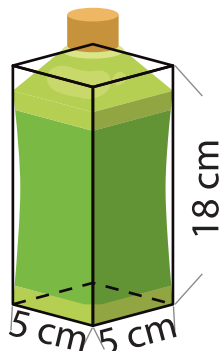

Answer

2




Answer

3




Answer