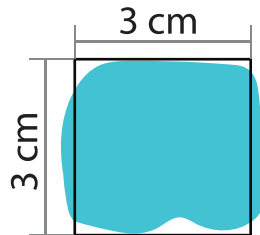


# I Estimating Area



You can estimate the area of irregular shape by breaking it into a simple shape.



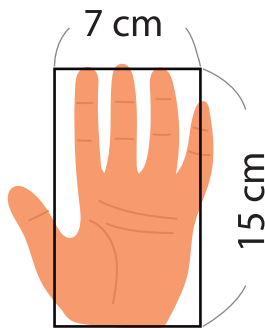
the area of the square

$$3 \times 3 = 9$$

about 9 cm<sup>2</sup>

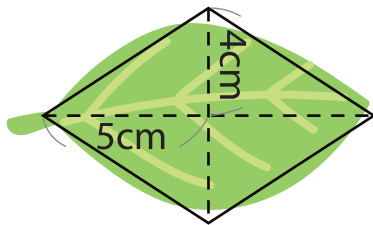
Find the approximate area of each shape below.

1



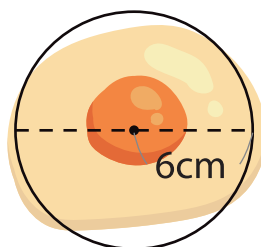

Answer

2




Answer

3




Answer