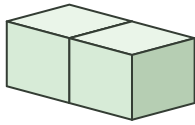




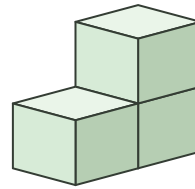
ブロックの数 1

■ つぎのブロックはいくつか^{かぞ}数えましょう。

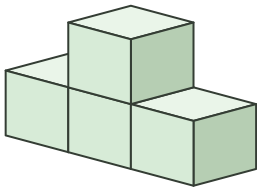
① ()



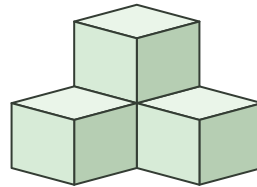
② ()



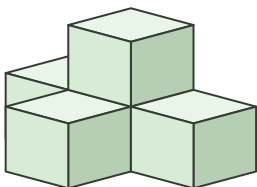
③ ()



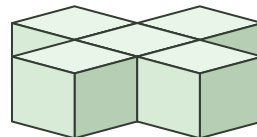
④ ()



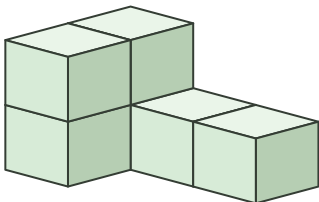
⑤ ()



⑥ ()



⑦ ()



⑧ ()

