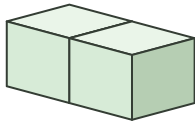




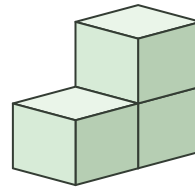
# ブロックの数 1

■ つぎのブロックはいくつか<sup>かぞ</sup>数えましょう。

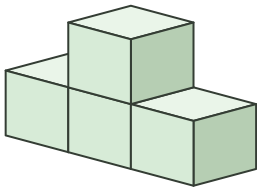
① (            )



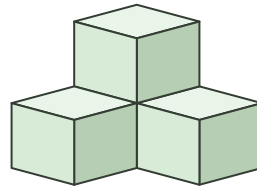
② (            )



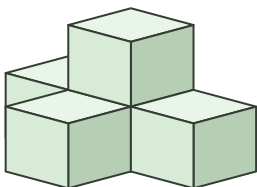
③ (            )



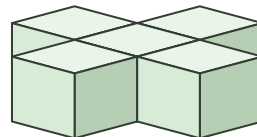
④ (            )



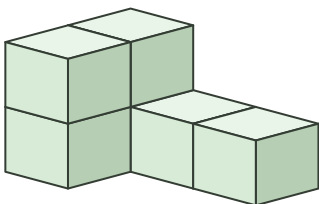
⑤ (            )



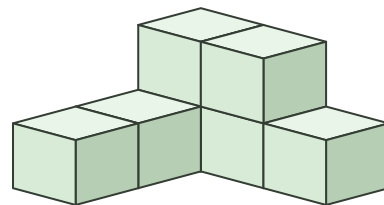
⑥ (            )



⑦ (            )



⑧ (            )

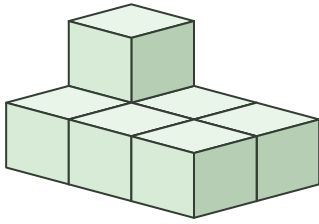




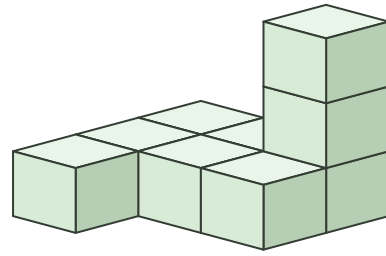
# ブロックの数 2

■ つぎのブロックはいくつか<sup>かぞ</sup>数えましょう。

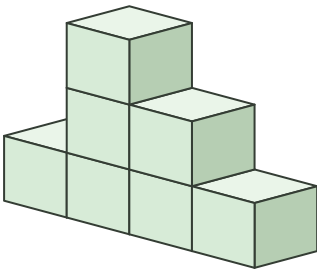
① (            )



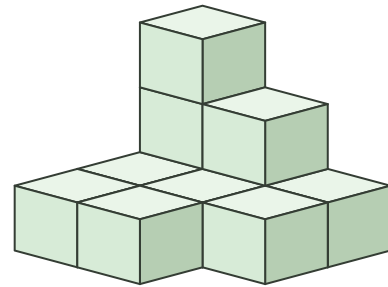
② (            )



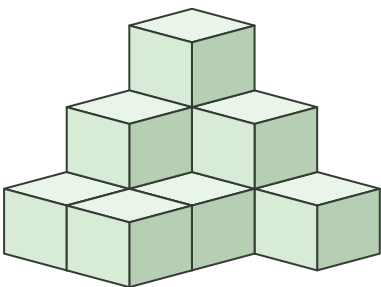
③ (            )



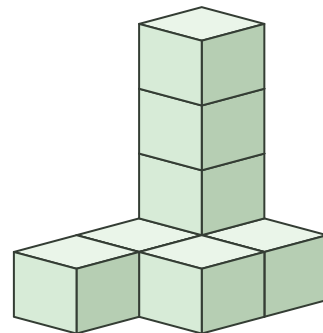
④ (            )



⑤ (            )



⑥ (            )

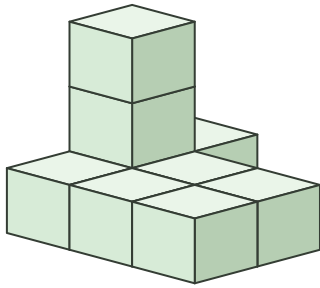




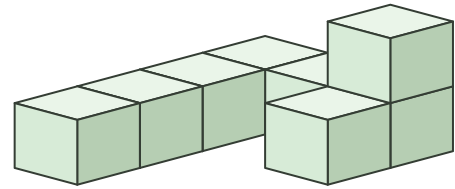
# ブロックの数 3

■ つぎのブロックはいくつか<sup>かぞ</sup>数えましょう。

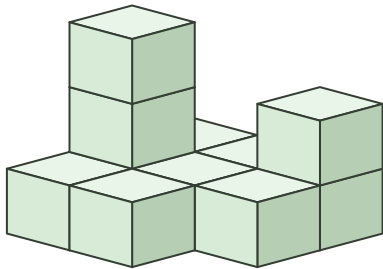
① (            )



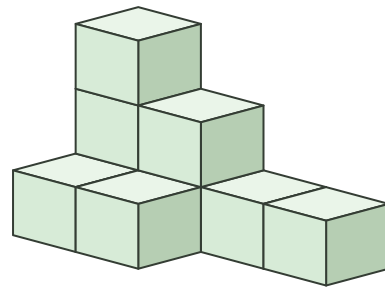
② (            )



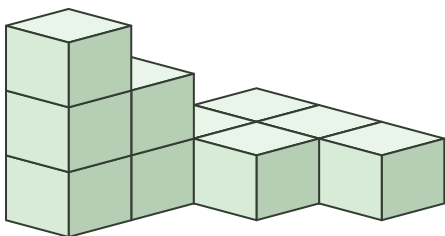
③ (            )



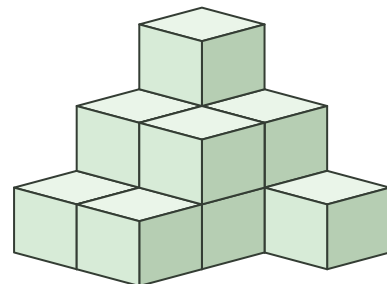
④ (            )



⑤ (            )



⑥ (            )

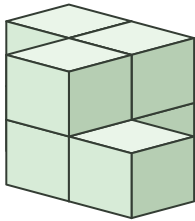




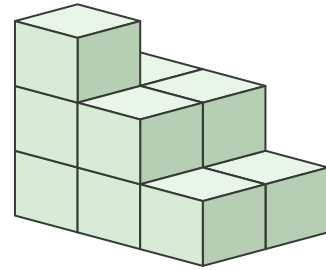
# ブロックの数 4

■ つぎのブロックはいくつか<sup>かぞ</sup>数えましょう。

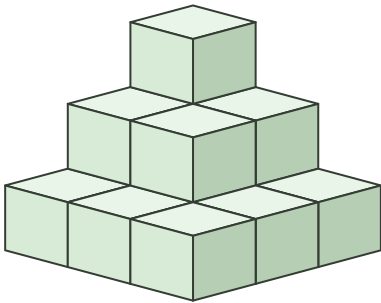
① ( )



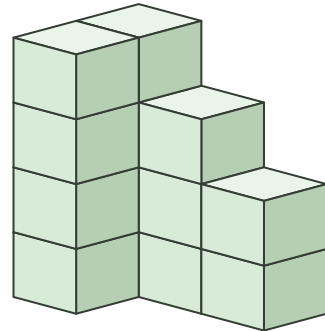
② ( )



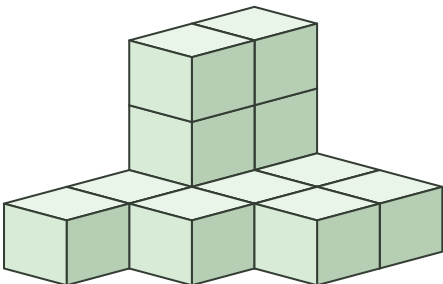
③ ( )



④ ( )



⑤ ( )



⑥ ( )

