

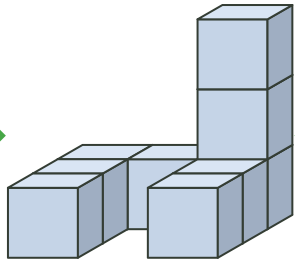




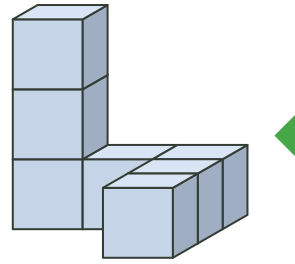
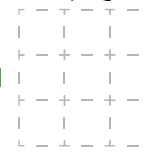
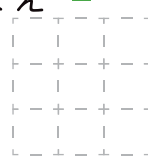


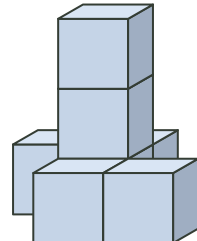

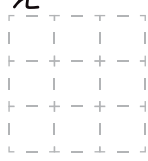


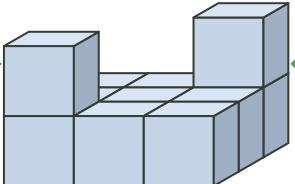





ブロックの形 4

■ つぎのブロックを 4 方向からみた形をかきましょう。

<p>①</p> <p>うえ</p>  <p>↓</p> <p>ひだり</p>  <p>→</p>  <p>←</p> <p>みぎ</p>  <p>↑</p> <p>まえ</p> 	<p>②</p> <p>うえ</p>  <p>↓</p> <p>ひだり</p>  <p>→</p>  <p>←</p> <p>みぎ</p>  <p>↑</p> <p>まえ</p> 
<p>③</p> <p>うえ</p>  <p>↓</p> <p>ひだり</p>  <p>→</p>  <p>←</p> <p>みぎ</p>  <p>↑</p> <p>まえ</p> 	<p>④</p> <p>うえ</p>  <p>↓</p> <p>ひだり</p>  <p>→</p>  <p>←</p> <p>みぎ</p>  <p>↑</p> <p>まえ</p> 