



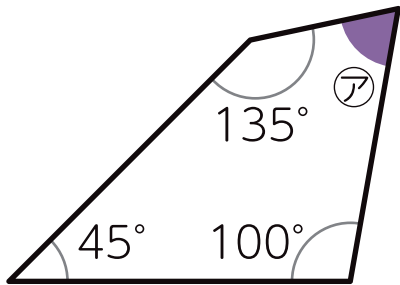
# 図形の角

名前

---

■ つぎの四角形の㉠～㉦の角度を求めましょう。

①



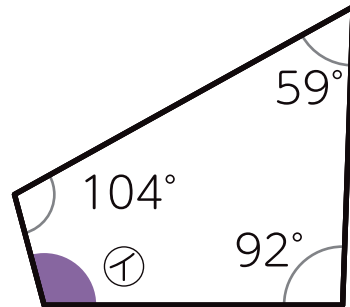
式

---

答え

---

②



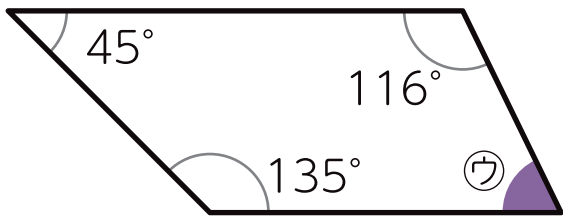
式

---

答え

---

③



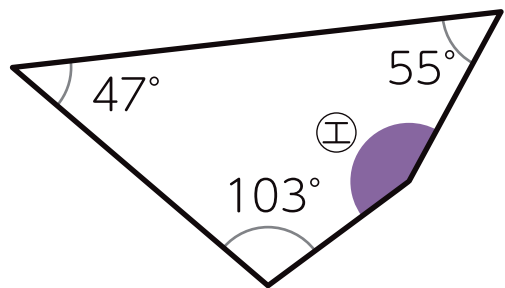
式

---

答え

---

④



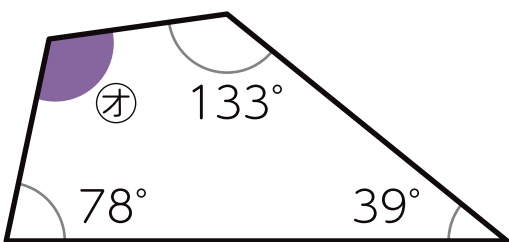
式

---

答え

---

⑤



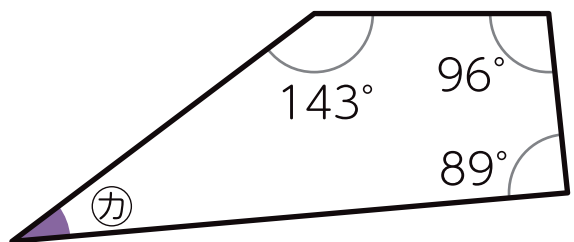
式

---

答え

---

⑥



式

---

答え

---