



4

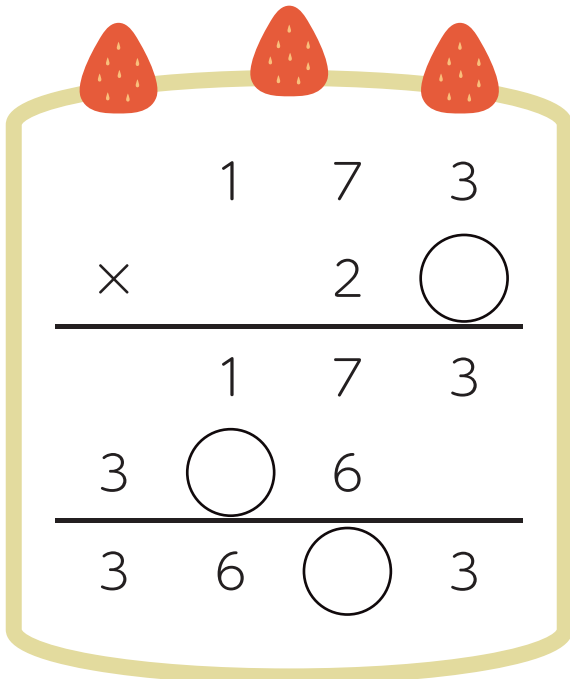
◆あなあき計算

かけ算のひっ算

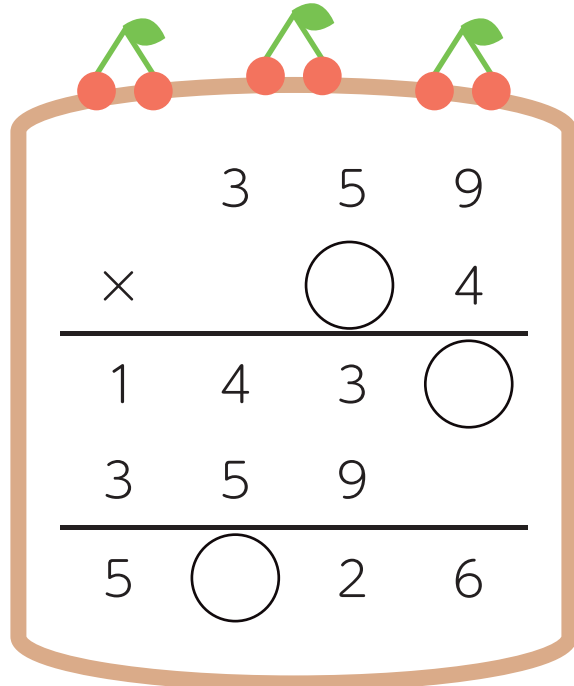
名前

□ まめっぷがケーキを食べちゃった！

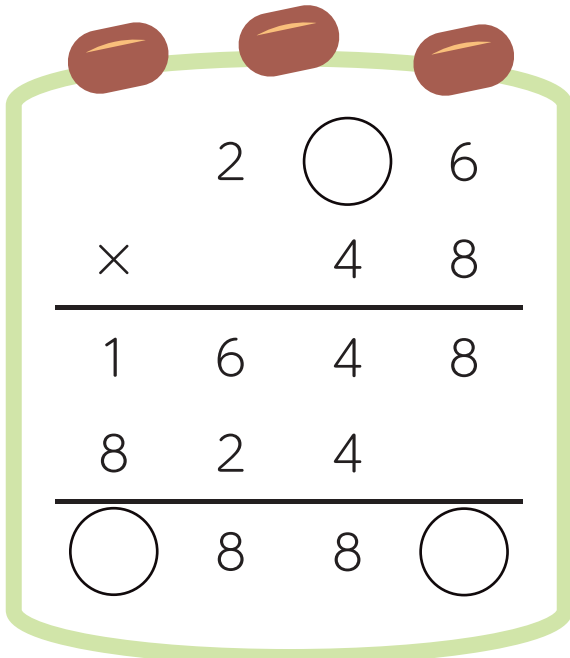
○ に数字をいれて、ひっ算をかんせいさせよう。



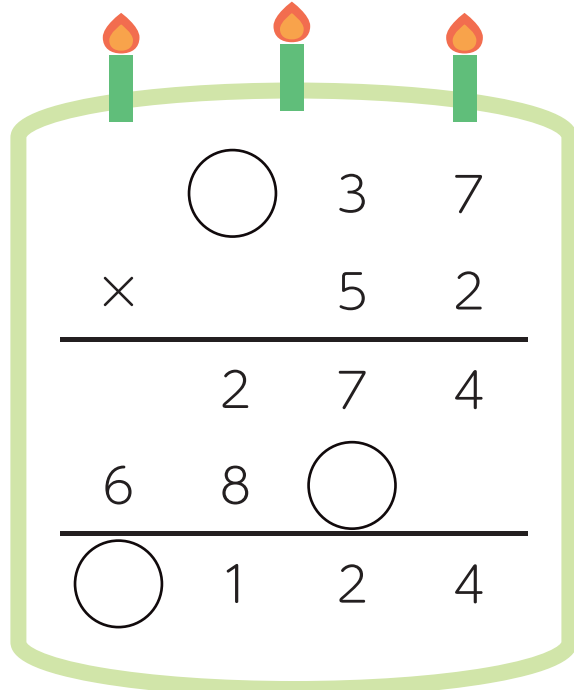
$$\begin{array}{r}
 173 \\
 \times 2 \quad \bigcirc \\
 \hline
 173 \\
 3 \quad \bigcirc \quad 6 \\
 \hline
 36 \quad \bigcirc \quad 3
 \end{array}$$



$$\begin{array}{r}
 359 \\
 \times \quad \bigcirc \quad 4 \\
 \hline
 143 \quad \bigcirc \\
 359 \\
 \hline
 5 \quad \bigcirc \quad 2 \quad 6
 \end{array}$$



$$\begin{array}{r}
 2 \quad \bigcirc \quad 6 \\
 \times \quad 4 \quad 8 \\
 \hline
 1648 \\
 824 \\
 \hline
 \bigcirc \quad 8 \quad 8 \quad \bigcirc
 \end{array}$$



$$\begin{array}{r}
 \bigcirc \quad 3 \quad 7 \\
 \times \quad 5 \quad 2 \\
 \hline
 274 \\
 68 \quad \bigcirc \\
 \hline
 \bigcirc \quad 1 \quad 2 \quad 4
 \end{array}$$