

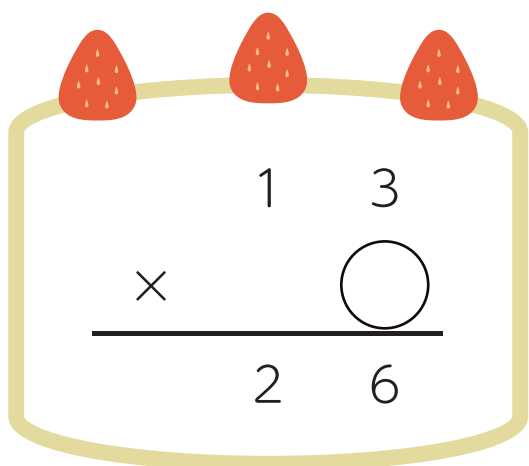
◆あなあき計算

かけ算のひっ算

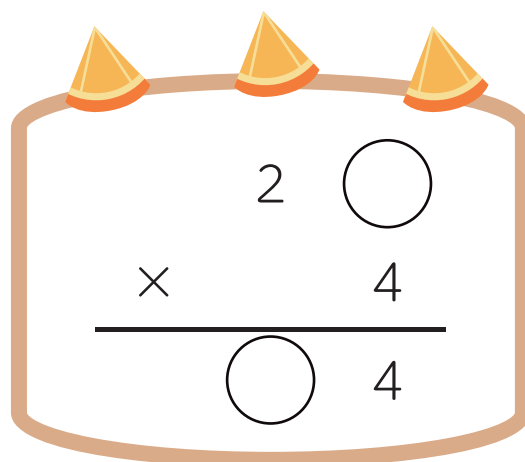
名前

□ まめっぷがケーキを食べちゃった！

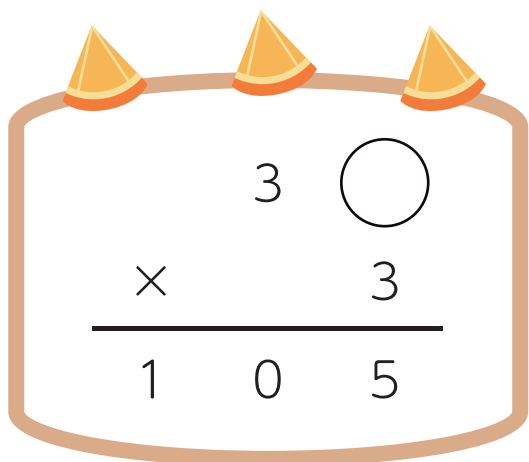
○ に数字をいれて、ひっ算をかんせいさせよう。



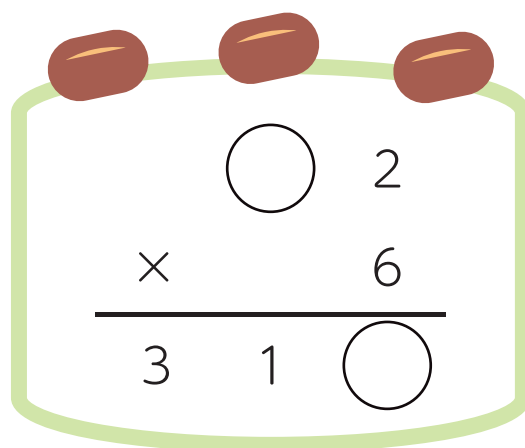
$$\begin{array}{r} 13 \\ \times \quad \bigcirc \\ \hline 26 \end{array}$$



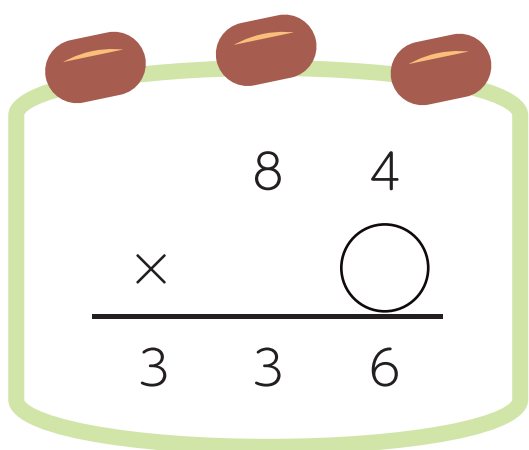
$$\begin{array}{r} 2\bigcirc \\ \times \quad 4 \\ \hline \bigcirc 4 \end{array}$$



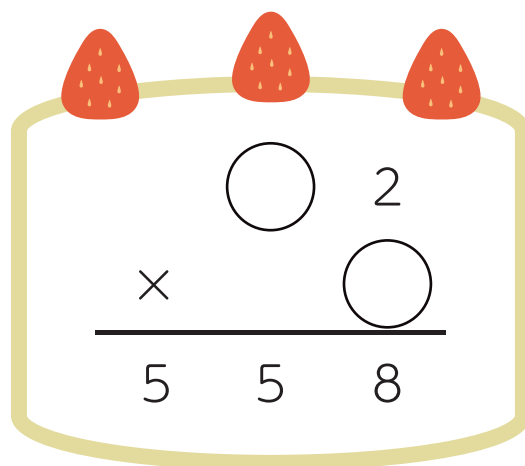
$$\begin{array}{r} 3\bigcirc \\ \times \quad 3 \\ \hline 105 \end{array}$$



$$\begin{array}{r} \bigcirc 2 \\ \times \quad 6 \\ \hline 31\bigcirc \end{array}$$



$$\begin{array}{r} 84 \\ \times \quad \bigcirc \\ \hline 336 \end{array}$$



$$\begin{array}{r} \bigcirc 2 \\ \times \quad \bigcirc \\ \hline 558 \end{array}$$