



2

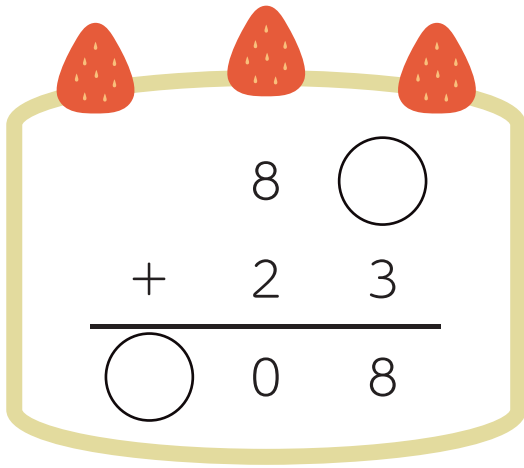
◆あなあき計算

足し算のひっ算

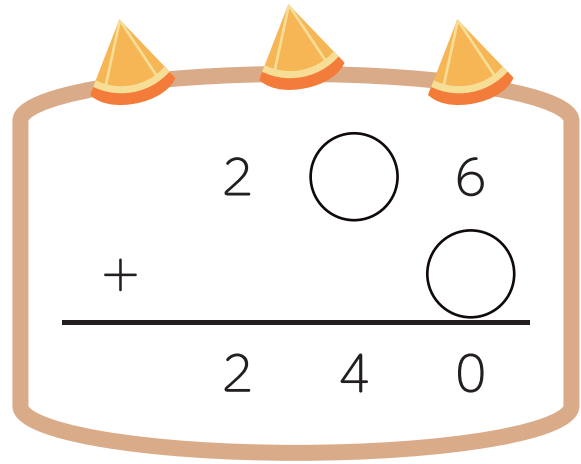
名前

□ まめつぶがケーキを食べちゃった！

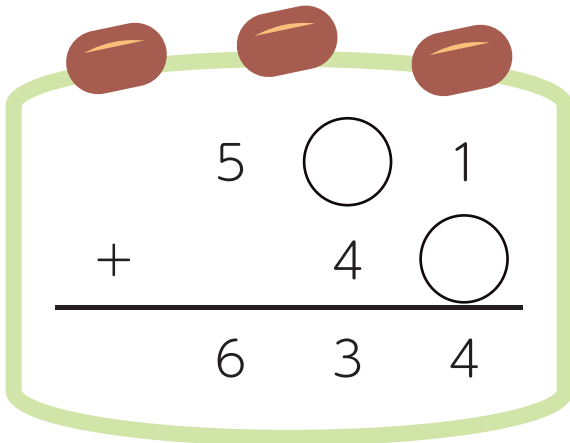
○ に数字をいれて、ひっ算をかんせいさせよう。



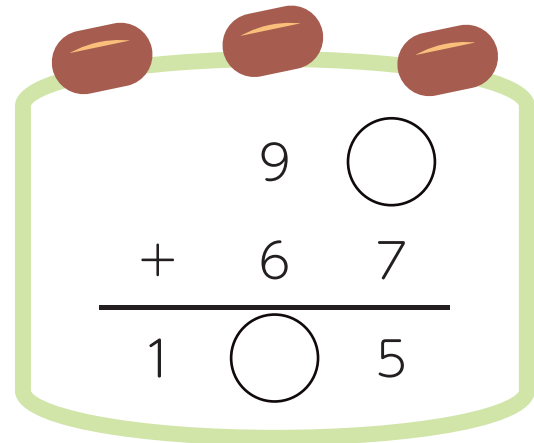
$$\begin{array}{r} 8 \quad \bigcirc \\ + 2 \quad 3 \\ \hline \bigcirc \quad 0 \quad 8 \end{array}$$



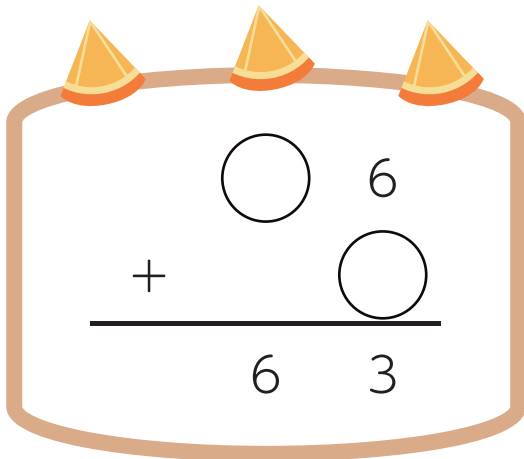
$$\begin{array}{r} 2 \quad \bigcirc \quad 6 \\ + \quad \quad \bigcirc \\ \hline 2 \quad 4 \quad 0 \end{array}$$



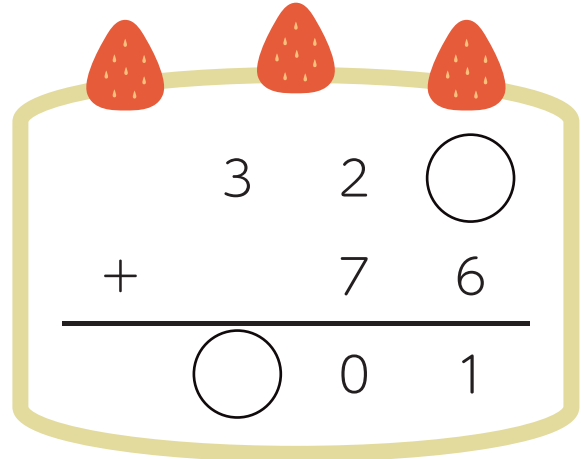
$$\begin{array}{r} 5 \quad \bigcirc \quad 1 \\ + \quad \quad 4 \quad \bigcirc \\ \hline 6 \quad 3 \quad 4 \end{array}$$



$$\begin{array}{r} 9 \quad \bigcirc \\ + 6 \quad 7 \\ \hline 1 \quad \bigcirc \quad 5 \end{array}$$



$$\begin{array}{r} \quad \bigcirc \quad 6 \\ + \quad \quad \bigcirc \\ \hline 6 \quad 3 \end{array}$$



$$\begin{array}{r} 3 \quad 2 \quad \bigcirc \\ + \quad \quad 7 \quad 6 \\ \hline \quad \bigcirc \quad 0 \quad 1 \end{array}$$