



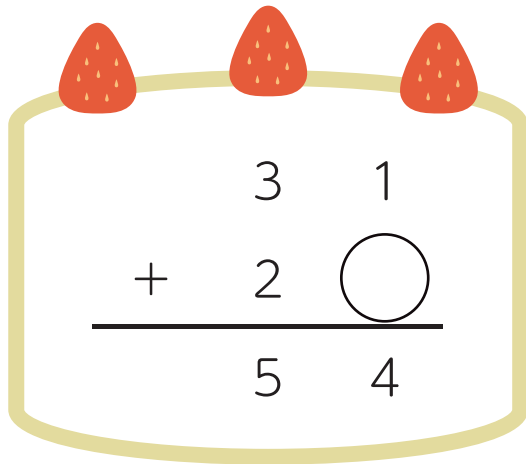
◆あなあき計算

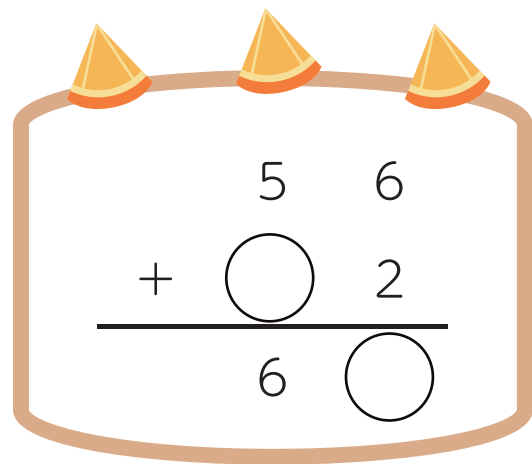
# 足し算のひっ算

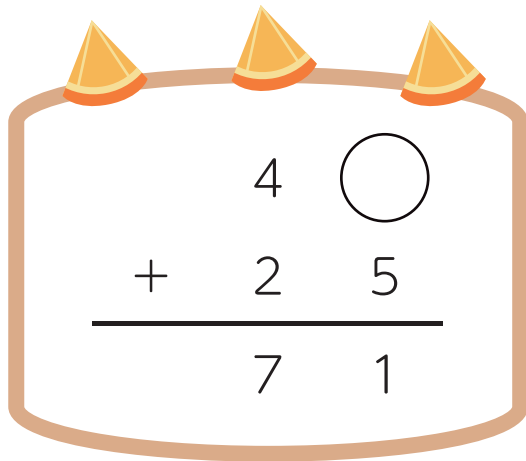
名前

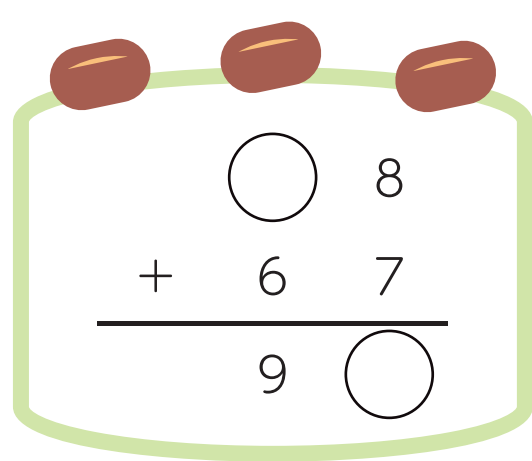
□ まめっぷがケーキを食べちゃった！

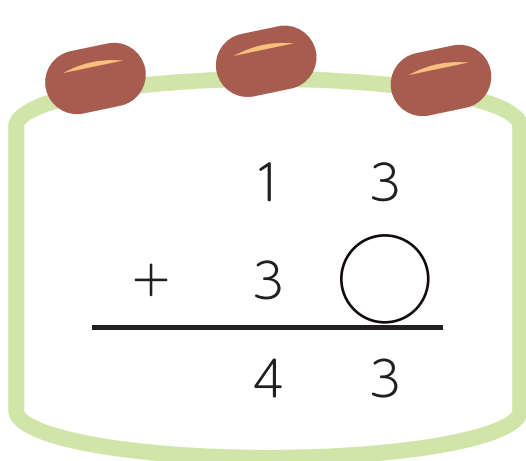
○ に数字をいれて、ひっ算をかんせいさせよう。

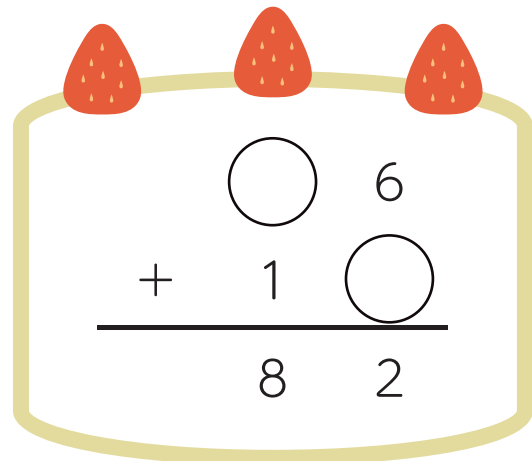

$$\begin{array}{r} 31 \\ + 2\bigcirc \\ \hline 54 \end{array}$$


$$\begin{array}{r} 56 \\ + \bigcirc 2 \\ \hline 6\bigcirc \end{array}$$


$$\begin{array}{r} 4\bigcirc \\ + 25 \\ \hline 71 \end{array}$$


$$\begin{array}{r} \bigcirc 8 \\ + 67 \\ \hline 9\bigcirc \end{array}$$


$$\begin{array}{r} 13 \\ + 3\bigcirc \\ \hline 43 \end{array}$$


$$\begin{array}{r} \bigcirc 6 \\ + 1\bigcirc \\ \hline 82 \end{array}$$