



# 2

◆kg(キログラム) ◆小数  
重さ



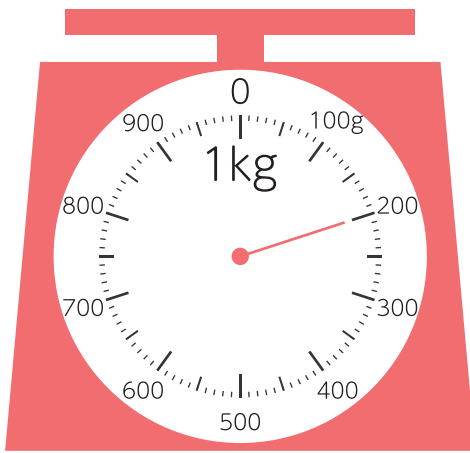
□ はりのさしている重さは何 kg ですか。

$$100 \text{ g} = 0.1 \text{ kg}$$



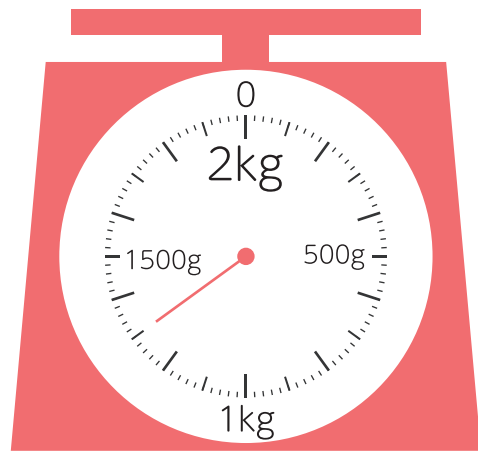
何 kg まで  
はかれる  
はかりかな？

①



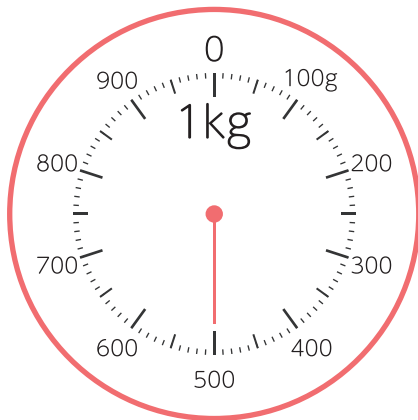
(            kg )

②



(                            )

③



(                            )

④



(                            )