


1

◆kg(キログラム),g(グラム)

重さ



キログラム

グラム

$$1 \text{ kg} = 1000 \text{ g}$$

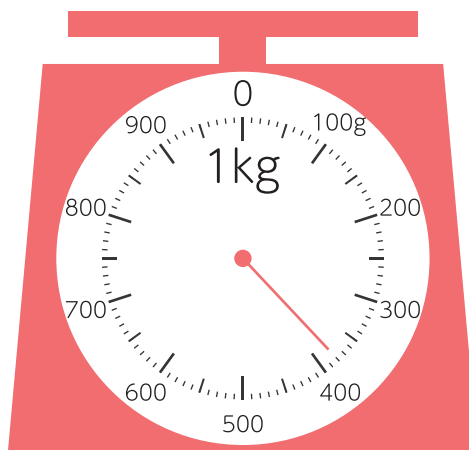
□ はりのさしている重さは何 g ですか。

①



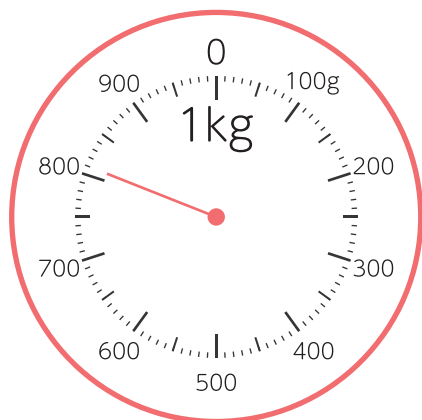
(            g            )

②



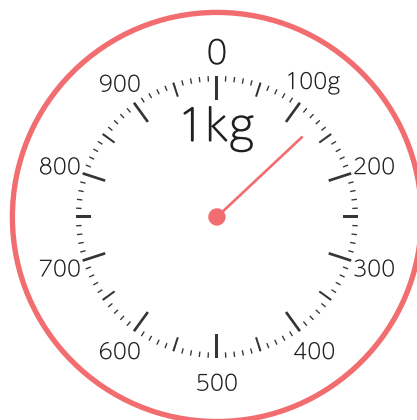
(                            )

③



(                            )

④



(                            )