


長さ

こたえ

じょうぎをつかって直線の長さをはかろう。

①




cm mm

②



cm mm

③




cm mm

④




cm mm

⑤



cm mm



長さ

こたえ


じょうぎをつかって直線の長さをはかろう。

①



9 cm 4 mm

②



14 cm 2 mm

③




5 cm 9 mm

④



8 cm 6 mm

⑤



11 cm 5 mm