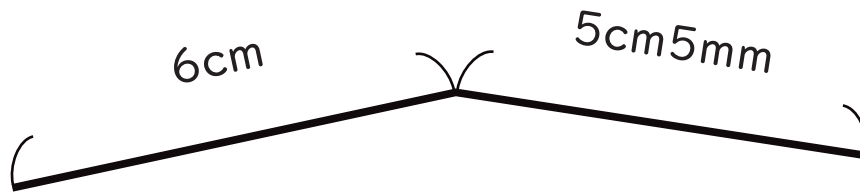


2

長さ

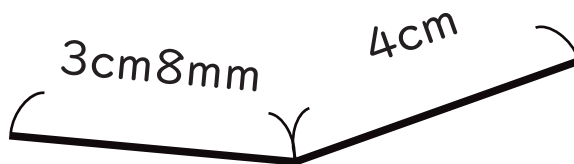
● ①から③の線の長さを計算しましょう。

①



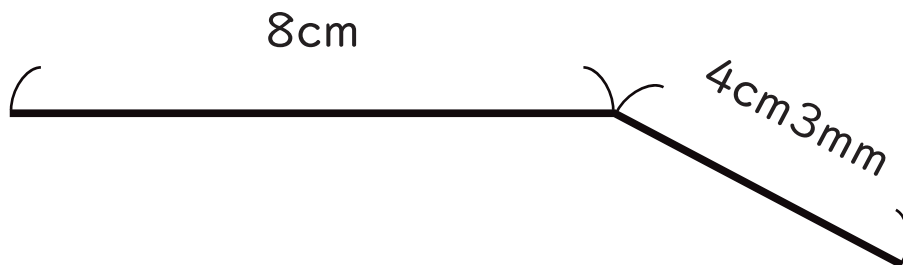
$$\square \text{ cm} + \square \text{ cm} \square \text{ mm} = \square \text{ cm} \square \text{ mm}$$

②



$$\square \text{ cm} \square \text{ mm} + \square \text{ cm} = \square \text{ cm} \square \text{ mm}$$

③



$$\square \text{ cm} + \square \text{ cm} \square \text{ mm} = \square \text{ cm} \square \text{ mm}$$