

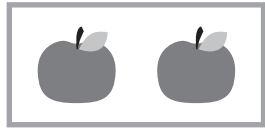
◆10よりおおきいかず

2ずつ かぞえよう!


なまえ

□ 2のまとまりをつかってかずをかぞえましょう。


れい




2




4




6



8









10



12

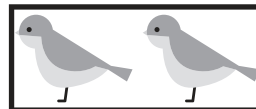

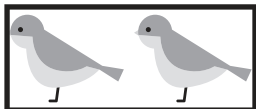
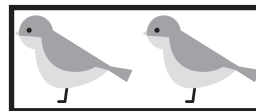

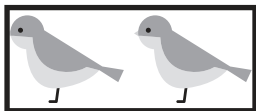
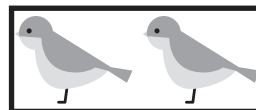
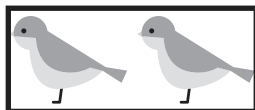
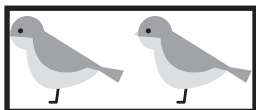
12こ

①








20ほん

②



18わ

③



16まい

2

◆10よりおおきいかず

5ずつかぞえよう!

なまえ

□ 5のまとまりをつくってかずをかぞえましょう。

れい



5



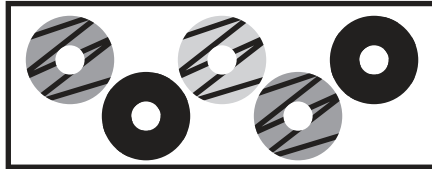
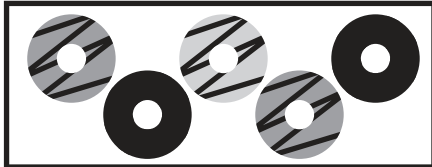
10



15

15こ

①



20こ

②



13こ

③



17ほん