

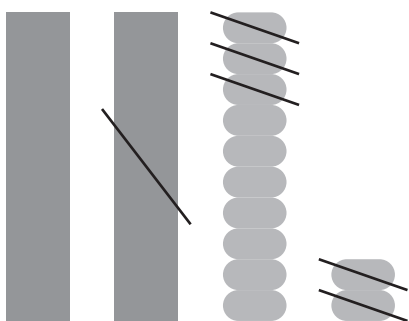
2

◆計算：ひき算

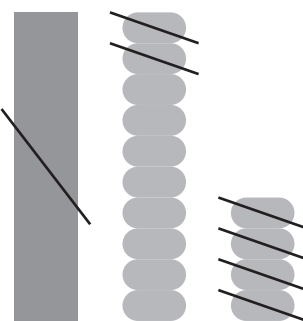
2けた－2けた

^ず図をさんこうにしながら ^{けいさん}計算しましょう。

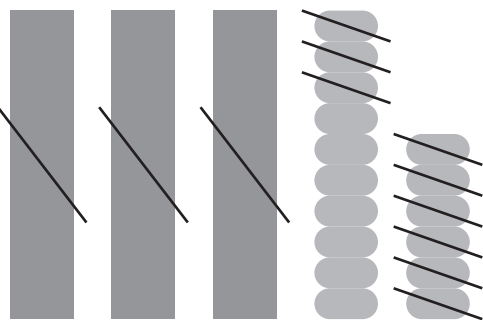
① $32 - 15 = 17$



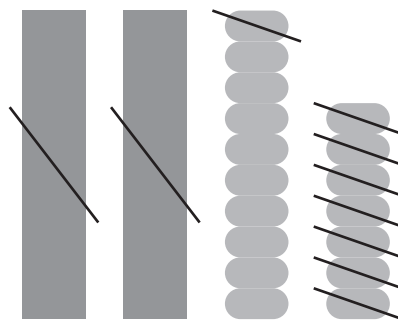
② $24 - 16 = 8$



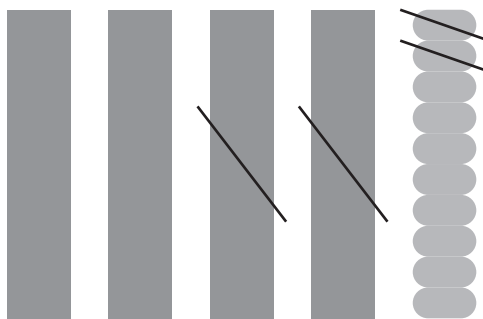
③ $46 - 39 = 7$



④ $37 - 28 = 9$



⑤ $50 - 22 = 28$



⑥ $33 - 17 = 16$

