

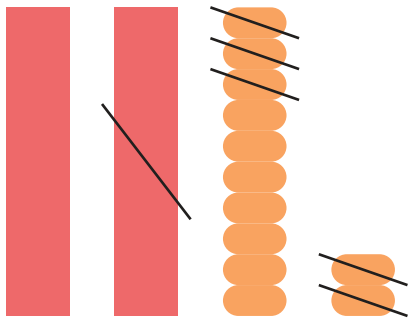
2

◆計算：ひき算


2けた－2けた

図をさんこうにしながら^ず計算^{けいさん}しましょう。


① $32 - 15 =$




② $24 - 16 =$



③ $46 - 39 =$



④ $37 - 28 =$



⑤ $50 - 22 =$



⑥ $33 - 17 =$

