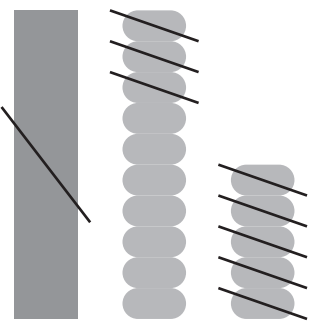


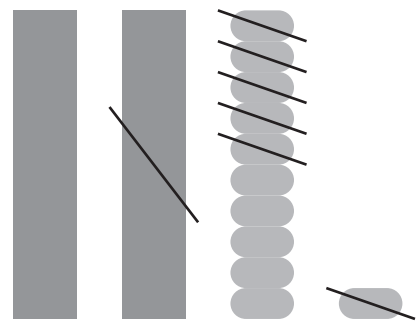
2けた－2けた

図をさんこうにしながら^ず計算^{けいさん}しましょう。

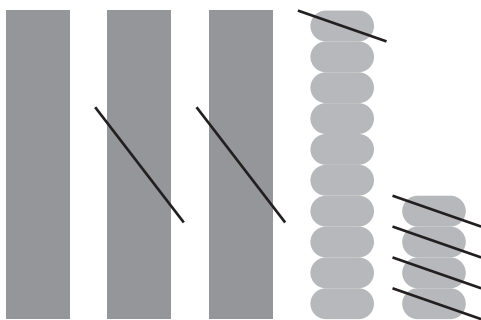
① $25 - 18 = 7$



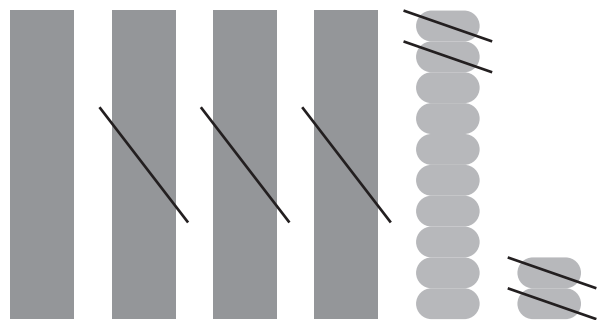
② $31 - 16 = 15$



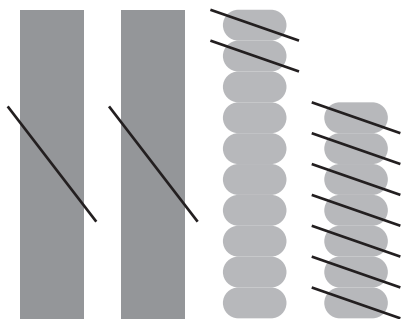
③ $44 - 25 = 19$



④ $52 - 34 = 18$



⑤ $37 - 29 = 8$



⑥ $66 - 18 = 48$

