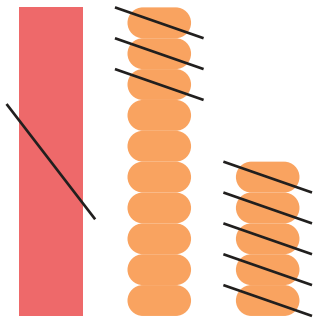


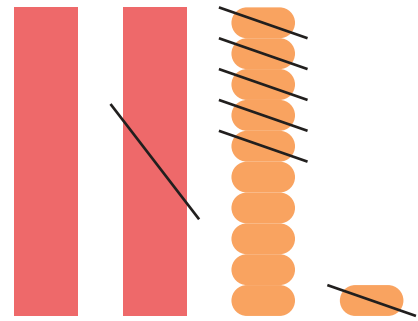
## 2けた－2けた

図をさんこうにしながら<sup>ず</sup>計算<sup>けいさん</sup>しましょう。


①  $25 - 18 =$




②  $31 - 16 =$




③  $44 - 25 =$



④  $52 - 34 =$



⑤  $37 - 29 =$



⑥  $66 - 18 =$

