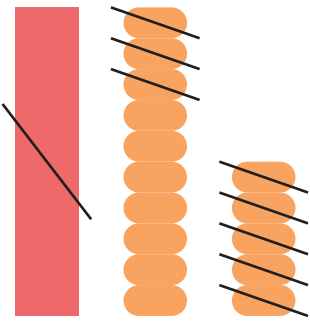


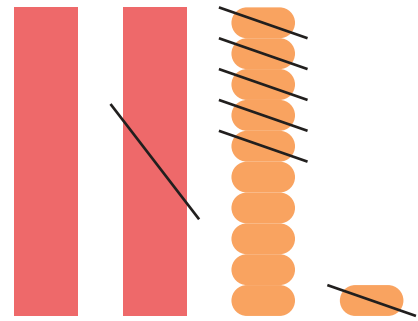
## 2けた－2けた

図をさんこうにしながら<sup>ず</sup>計算<sup>けいさん</sup>しましょう。


①  $25 - 18 =$




②  $31 - 16 =$




③  $44 - 25 =$



④  $52 - 34 =$



⑤  $37 - 29 =$



⑥  $66 - 18 =$



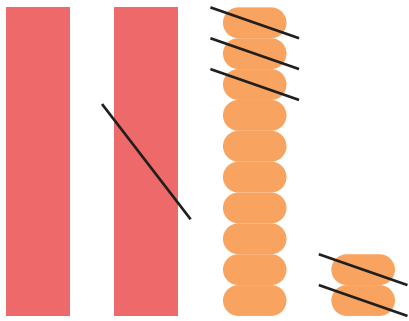
## 2

◆計算：ひき算


## 2けた－2けた

図をさんこうにしながら<sup>ず</sup>計算<sup>けいさん</sup>しましょう。


①  $32 - 15 =$




②  $24 - 16 =$



③  $46 - 39 =$



④  $37 - 28 =$



⑤  $50 - 22 =$



⑥  $33 - 17 =$

