


ひきざん

ひくかずをわけて
かんがえよう！



けいさんしましょう。

① $14 - 5 =$



⑥ $13 - 7 =$



② $18 - 9 =$



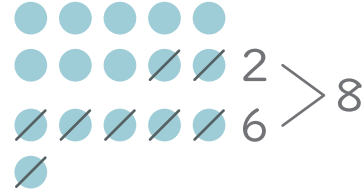
⑦ $15 - 6 =$



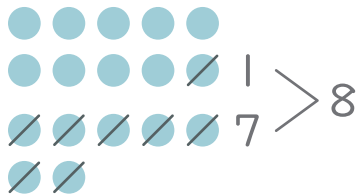
③ $12 - 3 =$



⑧ $16 - 8 =$



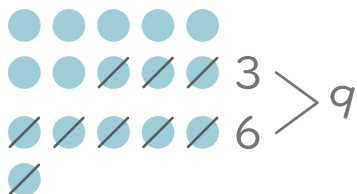
④ $17 - 8 =$



⑨ $11 - 5 =$



⑤ $16 - 9 =$



⑩ $12 - 8 =$

