


ひきざん

ひくかずをわけて
かんがえよう！



けいさんしましょう。

① $14 - 5 =$



⑥ $13 - 7 =$



② $18 - 9 =$



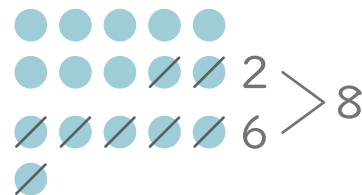
⑦ $15 - 6 =$



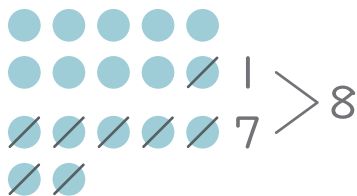
③ $12 - 3 =$



⑧ $16 - 8 =$



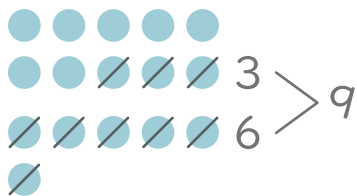
④ $17 - 8 =$



⑨ $11 - 5 =$



⑤ $16 - 9 =$



⑩ $12 - 8 =$



2

◆けいさん：10をこえるかず

ひきざん

□ けいさんしましょう。

① $13 - 4 =$

⑥ $11 - 8 =$

② $17 - 9 =$

⑦ $12 - 5 =$

③ $15 - 7 =$

⑧ $11 - 3 =$

④ $16 - 7 =$

⑨ $13 - 9 =$

⑤ $14 - 8 =$

⑩ $15 - 9 =$