



1

◆けいさん：10をこえるかず


## ひきざん

ひくかずをわけて  
かんがえよう！
 けいさんしましょう。

①  $14 - 5 = 9$



⑥  $13 - 7 = 6$



②  $18 - 9 = 9$



⑦  $15 - 6 = 9$



③  $12 - 3 = 9$



⑧  $16 - 8 = 8$



④  $17 - 8 = 9$



⑨  $11 - 5 = 6$



⑤  $16 - 9 = 7$



⑩  $12 - 8 = 4$



## 2

◆けいさん：10をこえるかず


## ひきざん

 けいさんしましょう。

①  $13 - 4 = 9$



⑥  $11 - 8 = 3$




②  $17 - 9 = 8$



⑦  $12 - 5 = 7$



③  $15 - 7 = 8$



⑧  $11 - 3 = 8$




④  $16 - 7 = 9$



⑨  $13 - 9 = 4$



⑤  $14 - 8 = 6$



⑩  $15 - 9 = 6$

