

1

◆けいさん：10をこえるかず

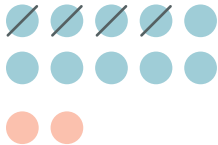
# ひきざん

10をつくって  
けいさんしよう！

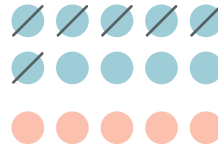


けいさんしましょう。

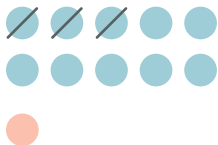
①  $12 - 4 =$



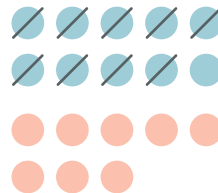
⑥  $15 - 6 =$



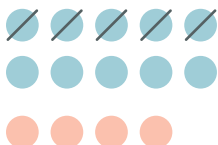
②  $11 - 3 =$



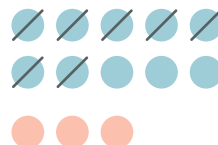
⑦  $18 - 9 =$



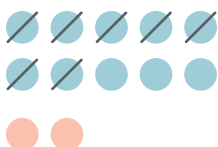
③  $14 - 5 =$



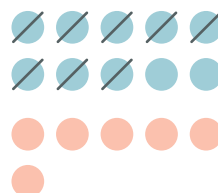
⑧  $13 - 7 =$



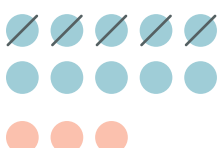
④  $12 - 7 =$



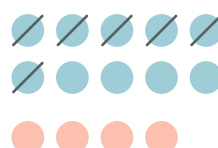
⑨  $16 - 8 =$



⑤  $13 - 5 =$



⑩  $14 - 6 =$



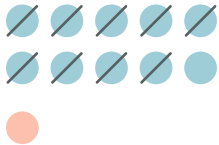
## 2

◆けいさん：10をこえるかず

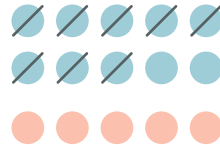
## ひきざん

□ けいさんしましょう。

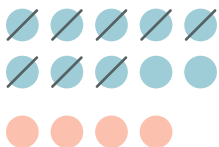
①  $11 - 9 =$



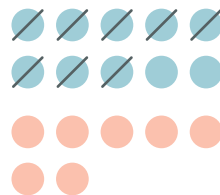
⑥  $15 - 8 =$



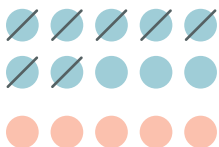
②  $14 - 8 =$



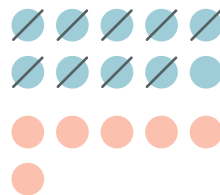
⑦  $17 - 8 =$



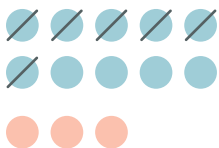
③  $15 - 7 =$



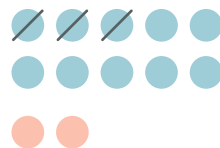
⑧  $16 - 9 =$



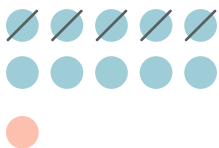
④  $13 - 6 =$



⑨  $12 - 3 =$



⑤  $11 - 5 =$



⑩  $14 - 7 =$

