


1

◆けいさん：10をこえるかず

たしざん

5といくつかにわけて
かんがえよう！




けいさんしましょう。

① $6 + 7 = 13$




⑥ $9 + 8 = 17$




② $8 + 5 = 13$




⑦ $7 + 7 = 14$




③ $6 + 8 = 14$




⑧ $8 + 8 = 16$




④ $8 + 7 = 15$



⑨ $6 + 9 = 15$



⑤ $9 + 9 = 18$



⑩ $7 + 9 = 16$

