


1

◆けいさん：10をこえるかず

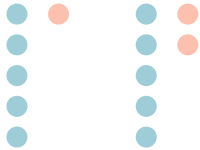
たしざん

5といくつかにわけて
かんがえよう！




けいさんしましょう。

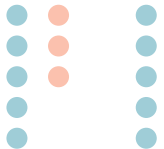
① $6 + 7 =$




⑥ $9 + 8 =$



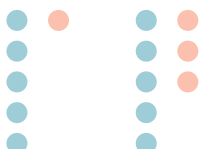
② $8 + 5 =$




⑦ $7 + 7 =$



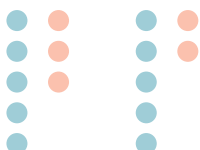
③ $6 + 8 =$



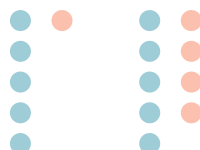
⑧ $8 + 8 =$




④ $8 + 7 =$



⑨ $6 + 9 =$



⑤ $9 + 9 =$



⑩ $7 + 9 =$

