

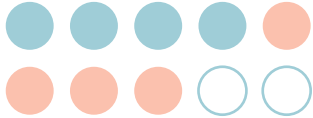
## 2

◆けいさん：10までのかず

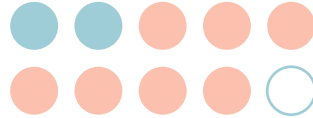
## たしざん

 けいさんしましょう。


①  $4 + 4 =$



⑥  $2 + 7 =$




②  $6 + 1 =$




⑦  $5 + 3 =$




③  $2 + 8 =$



⑧  $4 + 2 =$



④  $3 + 3 =$



⑨  $5 + 4 =$



⑤  $9 + 0 =$



⑩  $0 + 5 =$

