











◆これいくつ？

くだもの6

いちご、ぶどう、みかんはそれぞれいくつかな？

かずをかぞえてみぎしたの にすうじをかきましょう。



	<input type="text"/>
---	----------------------

	<input type="text"/>
---	----------------------

	<input type="text"/>
---	----------------------