







◆これいくつ？

# くだもの 1

りんご、メロン、バナナは それぞれいくつかな？

かずを かぞえて みぎしたの  に すうじを かきましょう。



	<input type="text"/>
---	----------------------

	<input type="text"/>
---	----------------------









	<input type="text"/>
---	----------------------

◆これいくつ？

## くだもの2

いちご、ぶどう、みかんはそれぞれいくつかな？

かずをかぞえてみぎしたの  にすうじをかきましょう。



	<input type="text"/>
---	----------------------

	<input type="text"/>
---	----------------------








	<input type="text"/>
---	----------------------

◆これいくつ？

# くだもの3

りんご、メロン、バナナはそれぞれいくつかな？

かずをかぞえてみぎしたの  にすうじをかきましょう。



	<input type="text"/>
---	----------------------

	<input type="text"/>
---	----------------------











	<input type="text"/>
---	----------------------

◆これいくつ？

# くだもの4

いちご、ぶどう、みかんはそれぞれいくつかな？

かずをかぞえてみぎしたの  にすうじをかきましょう。



	<input type="text"/>
---	----------------------

	<input type="text"/>
---	----------------------


	<input type="text"/>
---	----------------------

◆これいくつ？

# くだもの5

りんご、メロン、バナナはそれぞれいくつかな？

かずをかぞえてみぎしたの  にすうじをかきましょう。













◆これいくつ？

# くだもの6

いちご、ぶどう、みかんはそれぞれいくつかな？

かずをかぞえてみぎしたの  にすうじをかきましょう。



	<input type="text"/>
---	----------------------

	<input type="text"/>
---	----------------------

	<input type="text"/>
---	----------------------