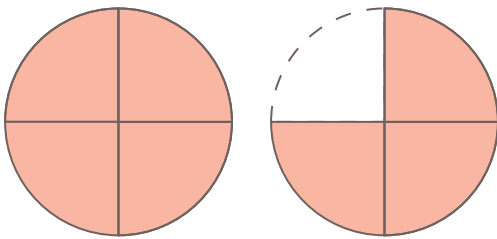


仮分数と帯分数

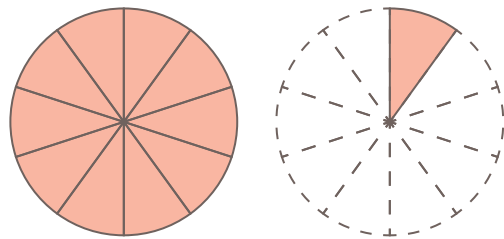
/

□ 仮分数を帯分数にしましょう。

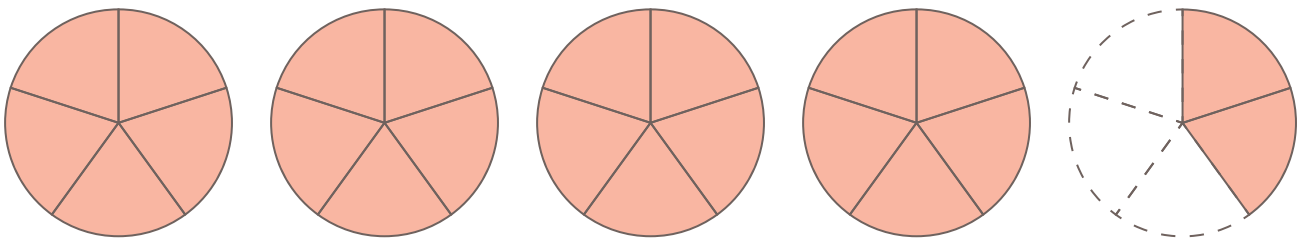
$$(1) \frac{7}{4} =$$



$$(2) \frac{11}{10} =$$



$$(3) \frac{22}{5} =$$



$$(4) \frac{32}{9} =$$

