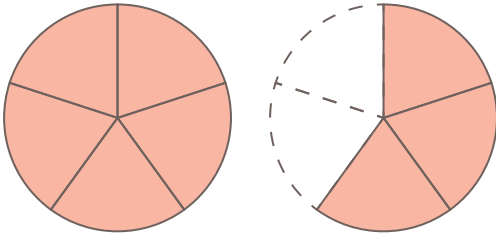


仮分数と帯分数

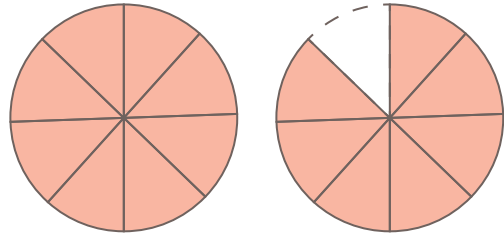


□ 仮分数を帯分数にしましょう。

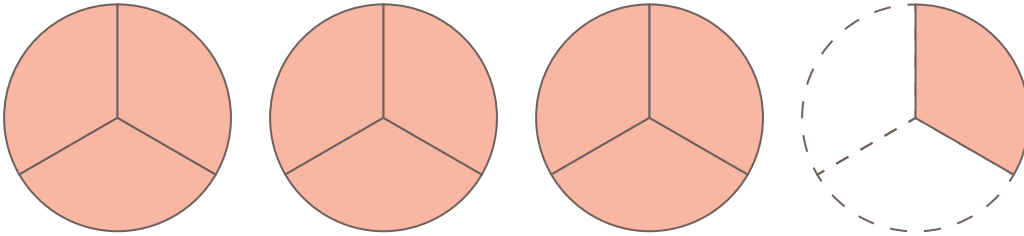
$$(1) \frac{8}{5} =$$



$$(2) \frac{15}{8} =$$



$$(3) \frac{10}{3} =$$



$$(4) \frac{13}{6} =$$

