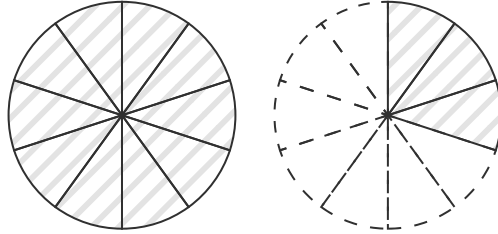


## 分数の大きさ

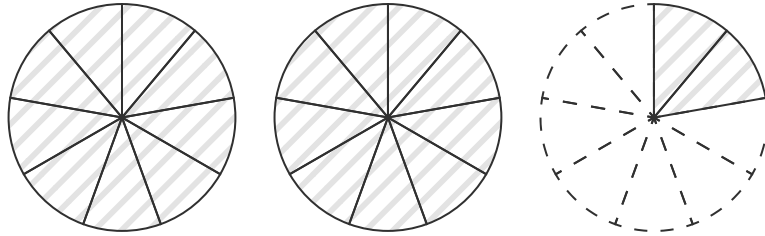
答え

図に色をぬって、分数の大きさを表しましょう。

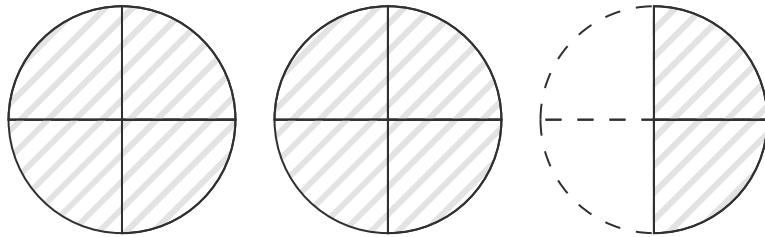
(1)  $\frac{13}{10}$



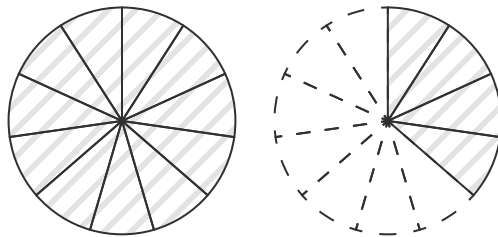
(2)  $\frac{20}{9}$



(3)  $2\frac{2}{4}$



(4)  $\frac{15}{11}$



(5)  $1\frac{5}{12}$

