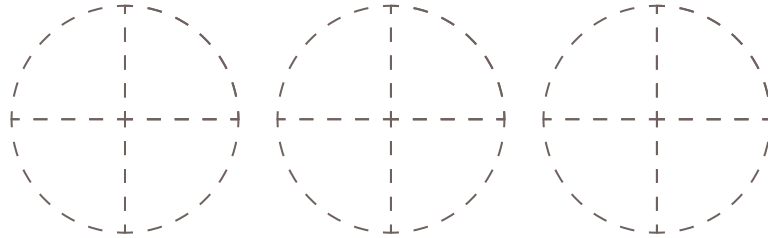
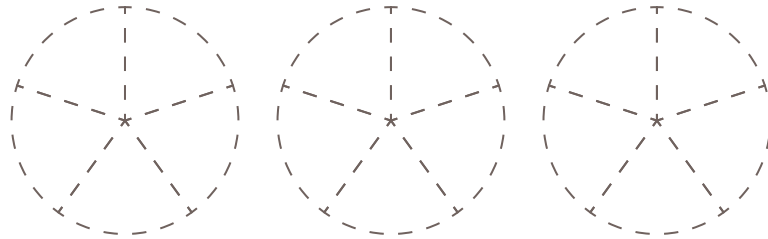


図に色をぬって、分数の大きさを表しましょう。

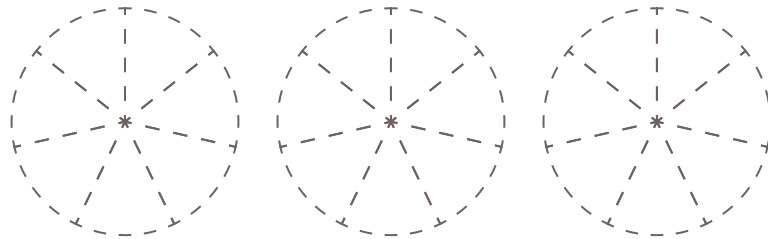
(1)  $1\frac{3}{4}$



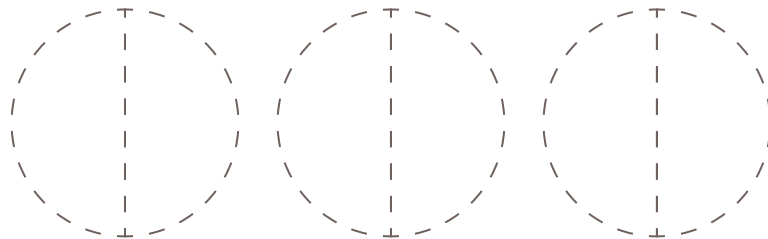
(2)  $2\frac{1}{5}$



(3)  $1\frac{6}{7}$



(4)  $1\frac{1}{2}$



(5)  $2\frac{5}{8}$

