

分数の大きさ

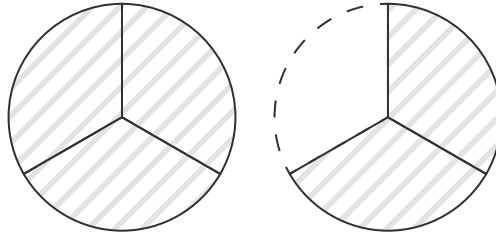
ひづけ
日付

月 日 ()

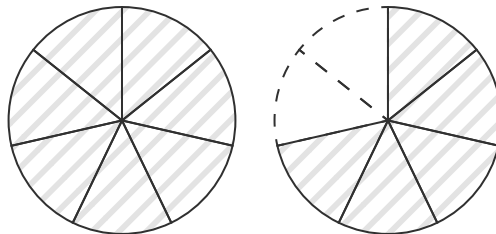
なまえ
名前

図に色をぬって、分数の大きさを表しましょう。

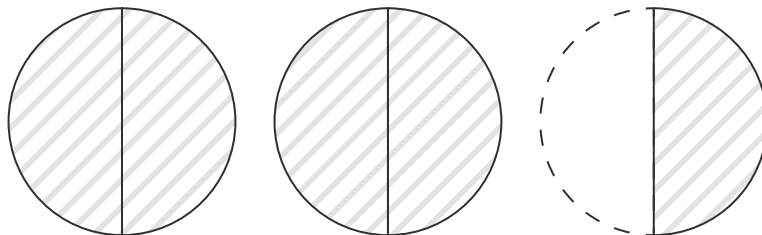
(1) $\frac{5}{3}$



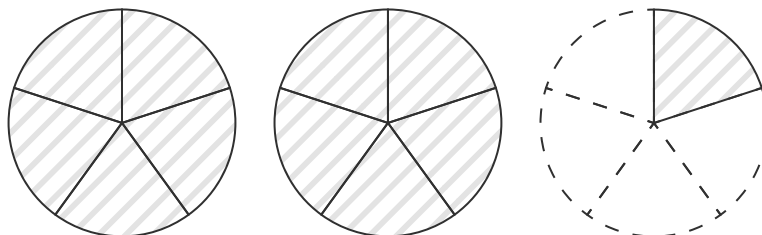
(2) $\frac{12}{7}$



(3) $\frac{5}{2}$



(4) $\frac{11}{5}$



(5) $\frac{10}{4}$

