

## 分数の大きさ

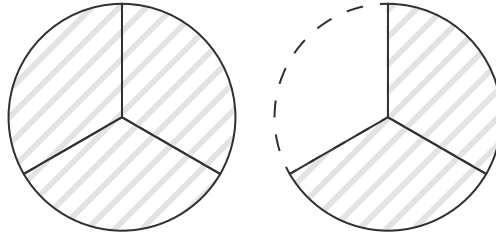
ひづけ  
日付

月 日 ( )

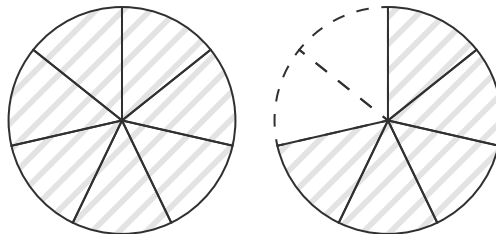
なまえ  
名前

図に色をぬって、分数の大きさを表しましょう。

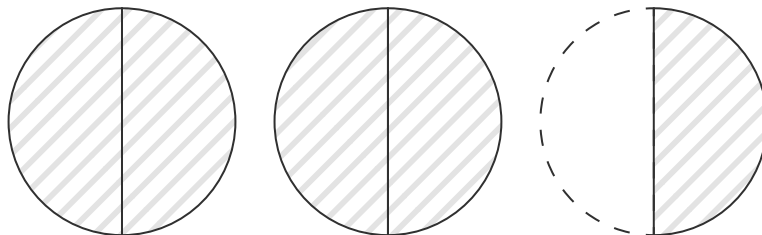
(1)  $\frac{5}{3}$



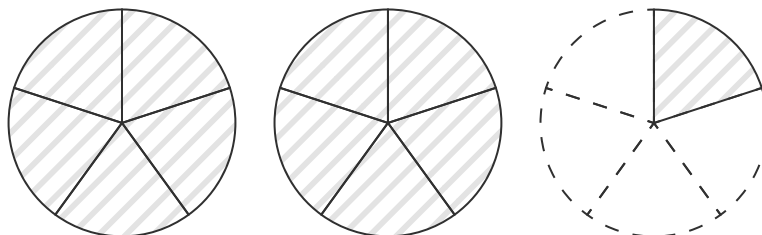
(2)  $\frac{12}{7}$



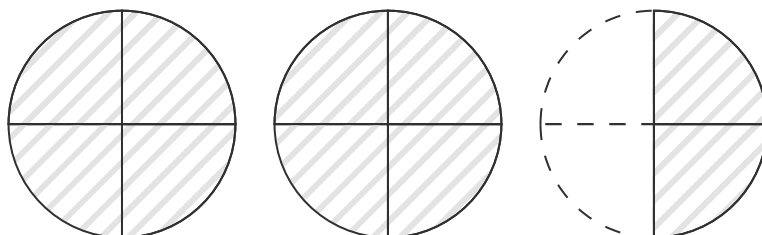
(3)  $\frac{5}{2}$



(4)  $\frac{11}{5}$



(5)  $\frac{10}{4}$

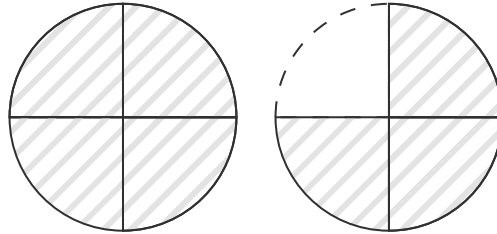


## 分数の大きさ

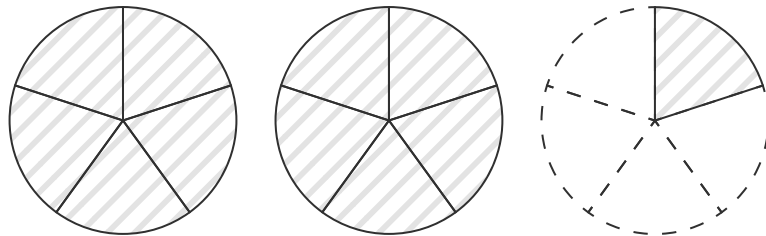
答え

図に色をぬって、分数の大きさを表しましょう。

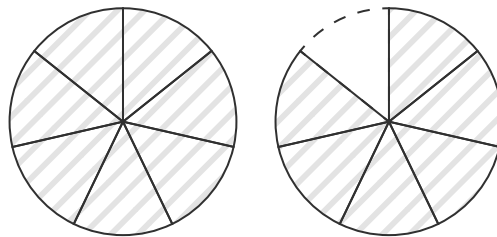
(1)  $1\frac{3}{4}$



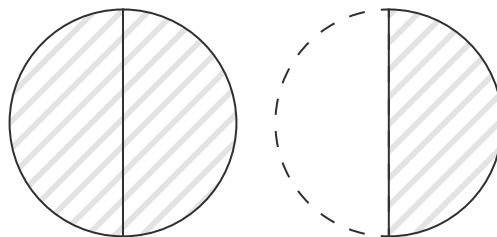
(2)  $2\frac{1}{5}$



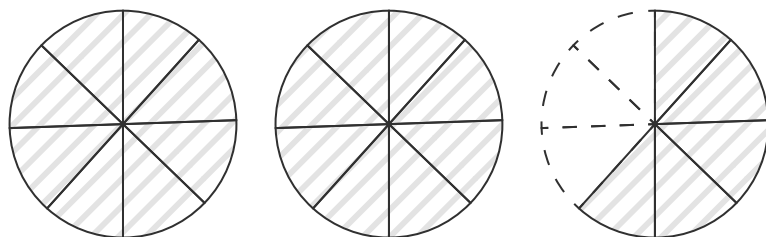
(3)  $1\frac{6}{7}$



(4)  $1\frac{1}{2}$



(5)  $2\frac{5}{8}$

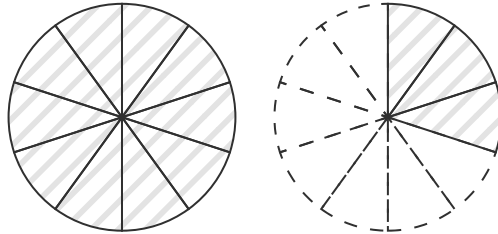


## 分数の大きさ

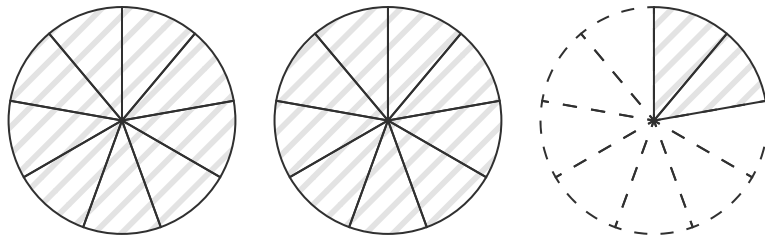
答え

図に色をぬって、分数の大きさを表しましょう。

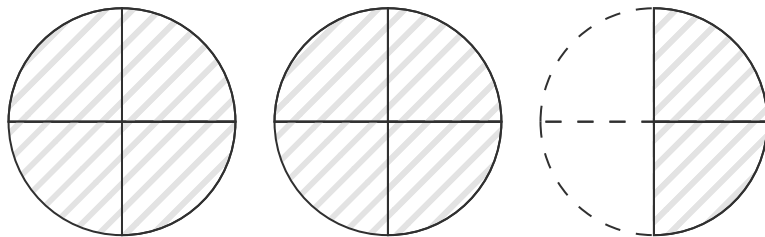
(1)  $\frac{13}{10}$



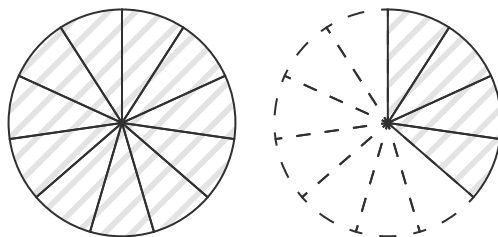
(2)  $\frac{20}{9}$



(3)  $2\frac{2}{4}$



(4)  $\frac{15}{11}$



(5)  $1\frac{5}{12}$

