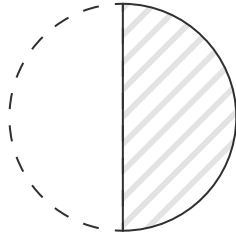


分数の大きさ

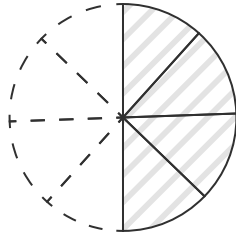
答え

図に色をぬって、分数の大きさを表しましょう。

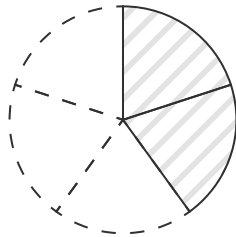
(1) $\frac{1}{2}$



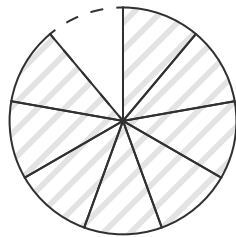
(2) $\frac{4}{8}$



(3) $\frac{2}{5}$



(4) $\frac{8}{9}$



(5) $\frac{4}{12}$

