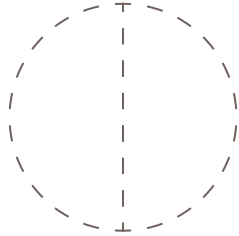
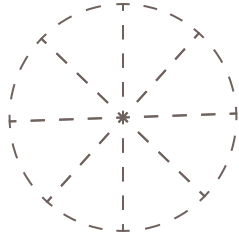


□ 図に色をぬって、分数の大きさを表しましょう。

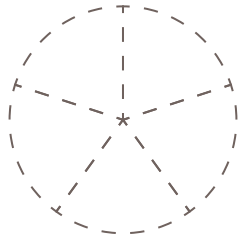
(1)  $\frac{1}{2}$



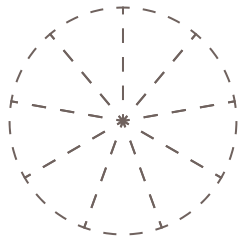
(2)  $\frac{4}{8}$



(3)  $\frac{2}{5}$



(4)  $\frac{8}{9}$



(5)  $\frac{4}{12}$

