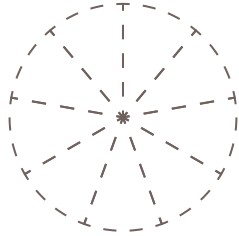
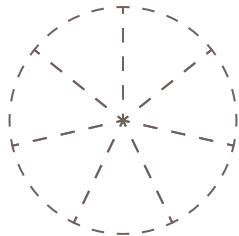


□ 図に色をぬって、分数の大きさを表しましょう。

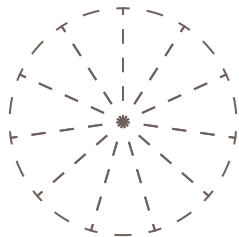
(1)  $\frac{1}{9}$



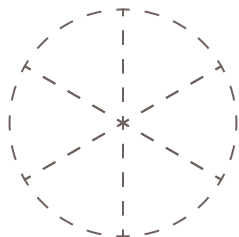
(2)  $\frac{2}{7}$



(3)  $\frac{5}{11}$



(4)  $\frac{2}{6}$



(5)  $\frac{1}{3}$

