

分数の大きさ

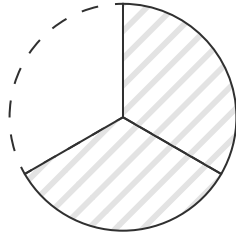
ひづけ
日付

月 日 ()

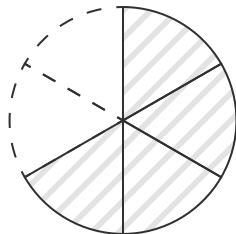
なまえ
名前

図に色をぬって、分数の大きさを表しましょう。

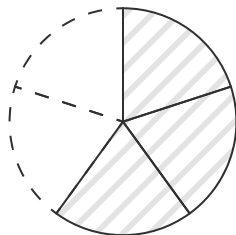
(1) $\frac{2}{3}$



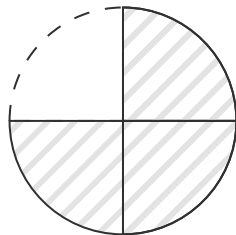
(2) $\frac{4}{6}$



(3) $\frac{3}{5}$



(4) $\frac{3}{4}$



(5) $\frac{5}{7}$

