

1

答え

◆分数・1より小さい数

分数の大きさ

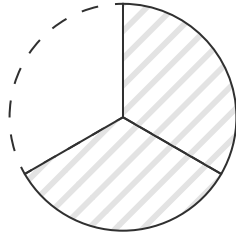
ひづけ
日付

月 日 ()

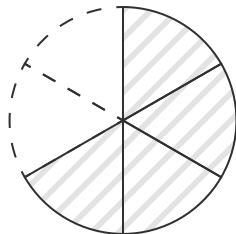
なまえ
名前

図に色をぬって、分数の大きさを表しましょう。

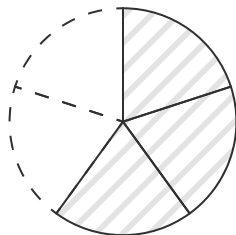
(1) $\frac{2}{3}$



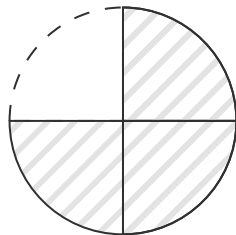
(2) $\frac{4}{6}$



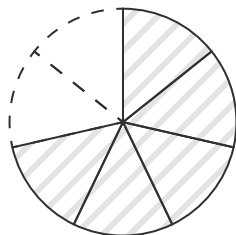
(3) $\frac{3}{5}$



(4) $\frac{3}{4}$

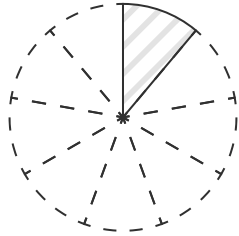


(5) $\frac{5}{7}$

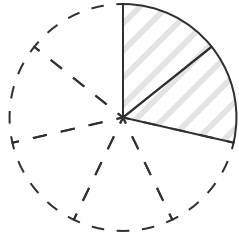


図に色をぬって、分数の大きさを表しましょう。

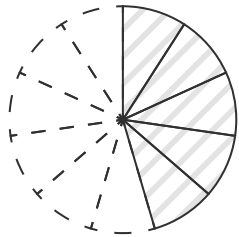
(1) $\frac{1}{9}$



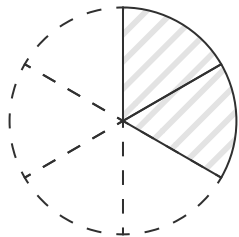
(2) $\frac{2}{7}$



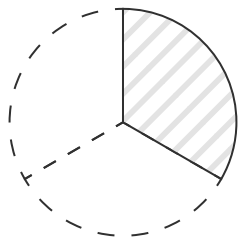
(3) $\frac{5}{11}$



(4) $\frac{2}{6}$



(5) $\frac{1}{3}$

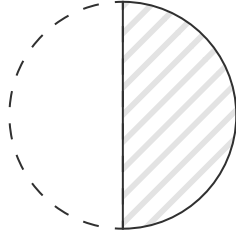


分数の大きさ

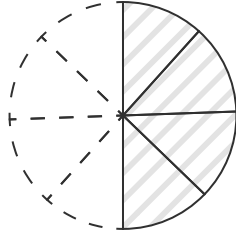
答え

図に色をぬって、分数の大きさを表しましょう。

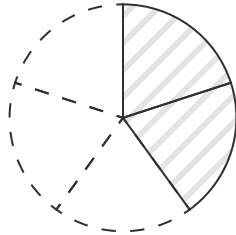
(1) $\frac{1}{2}$



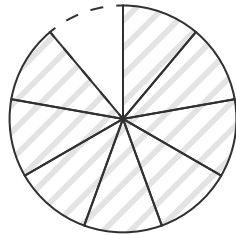
(2) $\frac{4}{8}$



(3) $\frac{2}{5}$



(4) $\frac{8}{9}$



(5) $\frac{4}{12}$

