
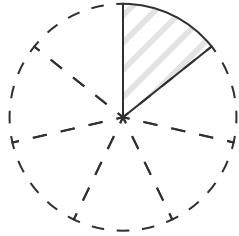


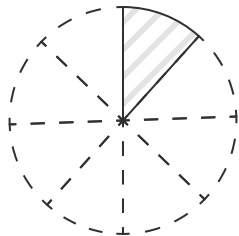
図に色をぬって、分数の大きさを表しましょう。



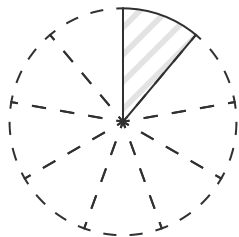
(1)  $\frac{1}{7}$



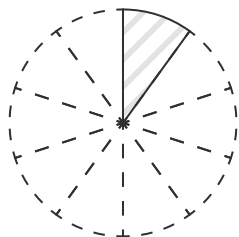
(2)  $\frac{1}{8}$



(3)  $\frac{1}{9}$



(4)  $\frac{1}{10}$



(5)  $\frac{1}{11}$

