
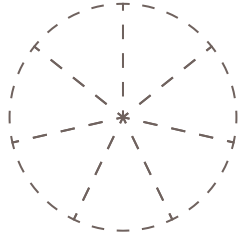


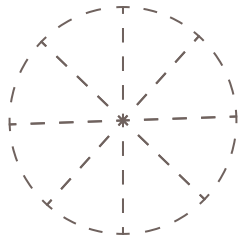
□ 図に色をぬって、分数の大きさを表しましょう。



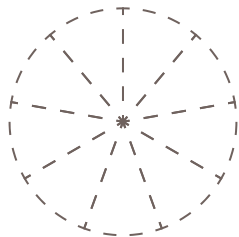
(1) $\frac{1}{7}$



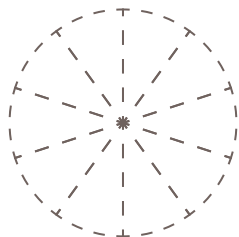
(2) $\frac{1}{8}$



(3) $\frac{1}{9}$



(4) $\frac{1}{10}$



(5) $\frac{1}{11}$

