

# 1

答え

◆分数・〇分の一


## 分数の大きさ

ひづけ  
日付

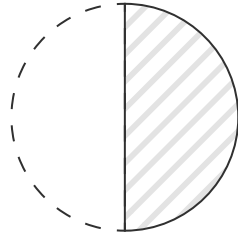
月 日 ( )

なまえ  
名前

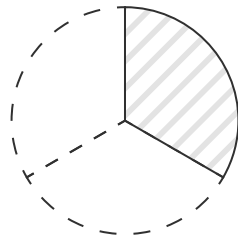
図に色をぬって、分数の大きさを表しましょう。



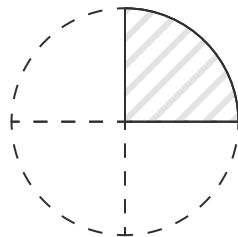
(1)  $\frac{1}{2}$



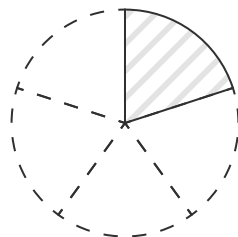
(2)  $\frac{1}{3}$



(3)  $\frac{1}{4}$



(4)  $\frac{1}{5}$



(5)  $\frac{1}{6}$

