

1

答え

◆分数・〇分の一


分数の大きさ

ひづけ
日付

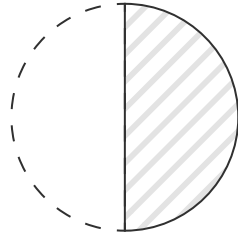
月 日 ()

なまえ
名前

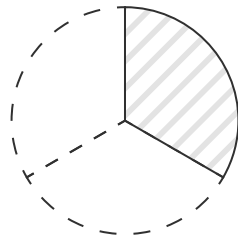
図に色をぬって、分数の大きさを表しましょう。



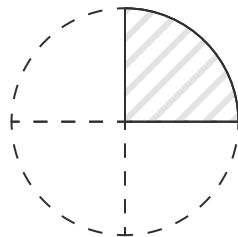
(1) $\frac{1}{2}$



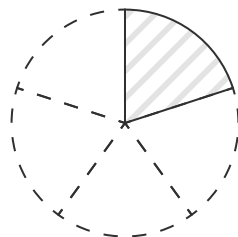
(2) $\frac{1}{3}$



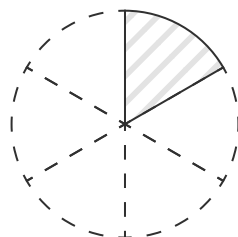
(3) $\frac{1}{4}$



(4) $\frac{1}{5}$




(5) $\frac{1}{6}$

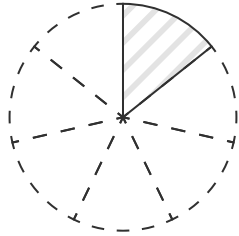


分数の大きさ

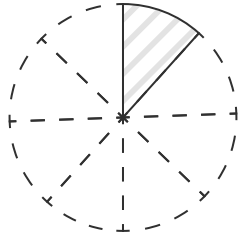
図に色をぬって、分数の大きさを表しましょう。



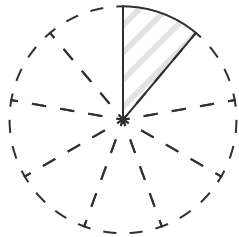
(1) $\frac{1}{7}$



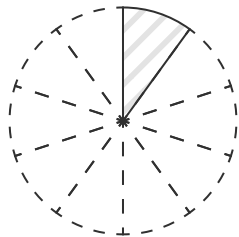
(2) $\frac{1}{8}$



(3) $\frac{1}{9}$



(4) $\frac{1}{10}$



(5) $\frac{1}{11}$

